


1 Reconnaissance d'intervalles (*chiffre et qualification M m J et notes*)


1 2 3 4 5 6 7 8 9 10




2 Dictée de rythmes ternaires

3 Relevé de rythme (*Scott Joplin*)

vous rajouterez les barres de mesure manquantes en sachant que les fragments 1 et 2 ont 2 mesures complètes et vous indiquerez la tonalité générale :





4 Reconnaissance auditive M5 m5 M6 m6 M6 m6 7
4 4 +



5 Relevé mélodique et harmonique

Vous relèverez les notes, le rythme, les cadences, les degrés et les chiffres de cet extrait de La Flûte Enchantée de Mozart



6 Relevé mélodique

Indiquez le titre de la pièce :

Le compositeur :

Les dates du compositeurs :

Ecrivez le nom et les degrés des cadences au bon endroit sous les basses

The musical score is in 3/4 time and consists of two systems of piano accompaniment. The first system contains two measures. The first measure is marked with a '1' and contains a melodic line in the treble clef with a quarter note, an eighth note, and a quarter note, followed by a sixteenth-note triplet. The bass line consists of a half note and a quarter note. The second measure is marked with a '2' and contains a melodic line in the treble clef with a quarter note, an eighth note, and a quarter note, followed by a sixteenth-note triplet. The bass line consists of a half note and a quarter note. The second system contains two measures. The first measure is marked with a '3' and contains a melodic line in the treble clef with a quarter note, an eighth note, and a quarter note. The bass line consists of a half note and a quarter note. The second measure is marked with a '4' and contains a melodic line in the treble clef with a quarter note. The bass line consists of a half note and a quarter note.

Ecrivez les gammes de la tonalité mineure ci-dessus en les identifiant

An empty musical staff in treble clef, consisting of five lines, intended for writing the first scale.


An empty musical staff in treble clef, consisting of five lines, intended for writing the second scale.

An empty musical staff in treble clef, consisting of five lines, intended for writing the third scale.

7 Question de cours


Vous complèterez ce thème de la Suite en Si mineur de Bach avec son armure ,son chiffrage de mesure, ses notes et rythmes

Précisez le titre de cette pièce :



A musical staff with a treble clef. The first measure contains a dotted quarter note on G4, followed by an eighth note on A4. The second measure contains an eighth note on B4. The rest of the staff is empty.

Ecrivez les 2 premières mesures d'une autre pièce en l'identifiant



Two empty musical staves for writing.